
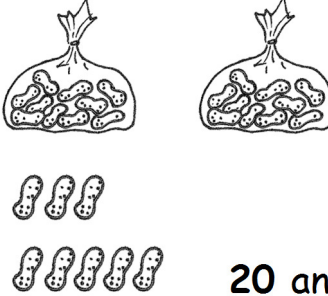
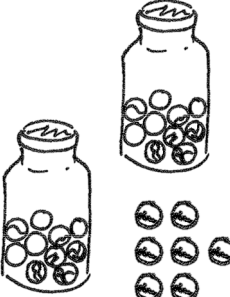
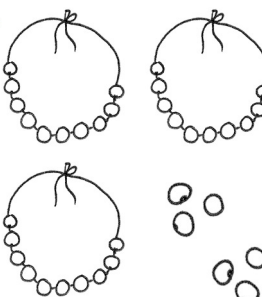




Lesson 4 Objective: Write and interpret two-digit numbers as addition sentences that combine tens and ones.


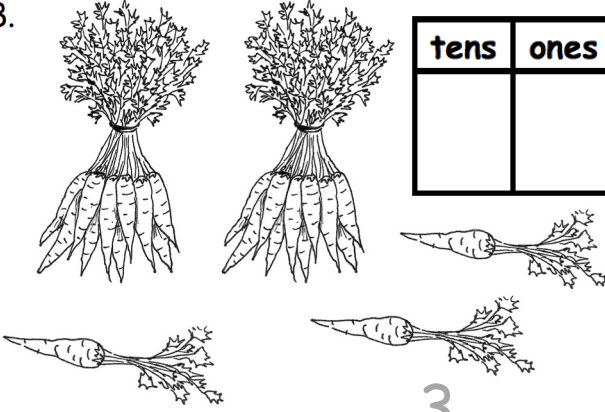
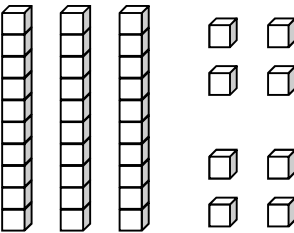
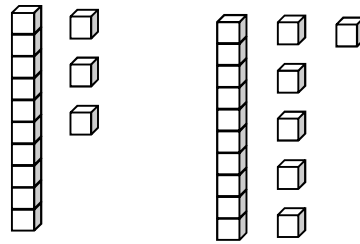
Name _____

Date _____

Fill in the number bond. Complete the sentences.

<p>1.</p>  <div style="display: flex; align-items: center; margin-left: 100px;"> <div style="border: 1px solid black; padding: 5px; margin-right: 10px;">20</div> <div style="border: 1px solid black; padding: 5px; margin-right: 10px;">3</div> <div style="border: 1px solid black; width: 40px; height: 40px; margin-right: 10px;"></div> </div> <p style="text-align: center;">20 and 3 make ____.</p> <p style="text-align: center;">$20 + 3 = \underline{\quad}$</p>	<p>2.</p>  <div style="display: flex; align-items: center; margin-left: 100px;"> <div style="border: 1px solid black; width: 40px; height: 40px; margin-right: 10px;"></div> <div style="border: 1px solid black; width: 40px; height: 40px; margin-right: 10px;"></div> <div style="border: 1px solid black; width: 40px; height: 40px; margin-right: 10px;"></div> </div> <p style="text-align: center;">20 and 8 make ____.</p> <p style="text-align: center;">$20 + 8 = \underline{\quad}$</p>
<p>3.</p>  <div style="display: flex; align-items: center; margin-left: 100px;"> <div style="border: 1px solid black; width: 40px; height: 40px; margin-right: 10px;"></div> <div style="border: 1px solid black; width: 40px; height: 40px; margin-right: 10px;"></div> <div style="border: 1px solid black; width: 40px; height: 40px; margin-right: 10px;"></div> </div> <p style="text-align: center;">$20 + 7 = \underline{\quad}$</p> <p style="text-align: center;">7 more than 20 is ____.</p>	<p>4.</p>  <div style="display: flex; align-items: center; margin-left: 100px;"> <div style="border: 1px solid black; width: 40px; height: 40px; margin-right: 10px;"></div> <div style="border: 1px solid black; width: 40px; height: 40px; margin-right: 10px;"></div> <div style="border: 1px solid black; width: 40px; height: 40px; margin-right: 10px;"></div> </div> <p style="text-align: center;">$30 + 6 = \underline{\quad}$</p> <p style="text-align: center;">6 more than 30 is ____.</p>
<p>5.</p>  <div style="display: flex; align-items: center; margin-left: 100px;"> <div style="border: 1px solid black; width: 40px; height: 40px; margin-right: 10px;"></div> <div style="border: 1px solid black; width: 40px; height: 40px; margin-right: 10px;"></div> <div style="border: 1px solid black; width: 40px; height: 40px; margin-right: 10px;"></div> </div> <p style="text-align: center;">$5 + 20 = \underline{\quad}$</p> <p style="text-align: center;">20 more than 5 is ____.</p>	<p>6.</p>  <div style="display: flex; align-items: center; margin-left: 100px;"> <div style="border: 1px solid black; width: 40px; height: 40px; margin-right: 10px;"></div> <div style="border: 1px solid black; width: 40px; height: 40px; margin-right: 10px;"></div> <div style="border: 1px solid black; width: 40px; height: 40px; margin-right: 10px;"></div> </div> <p style="text-align: center;">$8 + 30 = \underline{\quad}$</p> <p style="text-align: center;">30 more than 8 is ____.</p>

Write the tens and ones. Then, write an addition sentence to add the tens and ones.

<p>7.</p>  <table border="1" style="margin-left: auto; margin-right: auto; text-align: center;"> <tr> <th style="padding: 5px;">tens</th> <th style="padding: 5px;">ones</th> </tr> <tr> <td style="font-size: 2em;">1</td> <td style="font-size: 2em;">4</td> </tr> </table> <p style="text-align: center; margin-top: 20px;"><u>10</u> + <u>4</u> = <u> </u></p>	tens	ones	1	4	<p>8.</p>  <table border="1" style="margin-left: auto; margin-right: auto; text-align: center;"> <tr> <th style="padding: 5px;">tens</th> <th style="padding: 5px;">ones</th> </tr> <tr> <td style="height: 40px;"></td> <td style="height: 40px;"></td> </tr> </table> <p style="text-align: center; margin-top: 20px;"><u> </u> + <u>3</u> = <u> </u></p>	tens	ones		
tens	ones								
1	4								
tens	ones								
<p>9.</p>  <table border="1" style="margin-left: auto; margin-right: auto; text-align: center;"> <tr> <th style="padding: 5px;">tens</th> <th style="padding: 5px;">ones</th> </tr> <tr> <td style="height: 40px;"></td> <td style="height: 40px;"></td> </tr> </table> <p style="text-align: center; margin-top: 20px;"><u> </u> = <u>30</u> + <u> </u></p>	tens	ones			<p>10.</p>  <table border="1" style="margin-left: auto; margin-right: auto; text-align: center;"> <tr> <th style="padding: 5px;">tens</th> <th style="padding: 5px;">ones</th> </tr> <tr> <td style="height: 40px;"></td> <td style="height: 40px;"></td> </tr> </table> <p style="text-align: center; margin-top: 20px;"><u> </u> = <u>20</u> + <u> </u></p>	tens	ones		
tens	ones								
tens	ones								

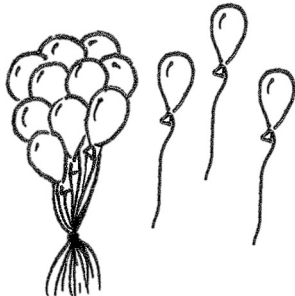
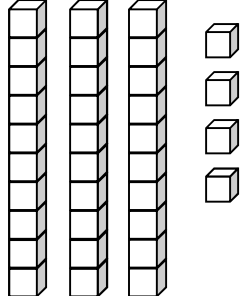
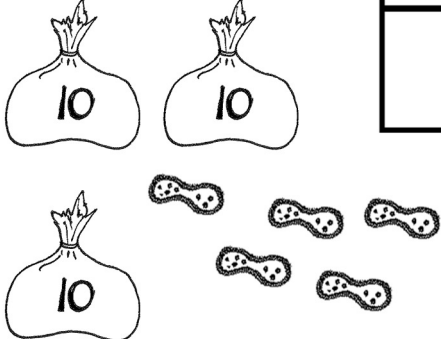

Match.

- | | |
|----------------------|----------|
| 11. 4 tens • | • 20 + 7 |
| 12. 2 tens 7 ones • | • 40 |
| 13. 3 more than 20 • | • 20 + 3 |
| 14. 9 ones 3 tens • | • 2 + 30 |
| 15. 2 ones 3 tens • | • 9 + 30 |

Name _____

Date _____


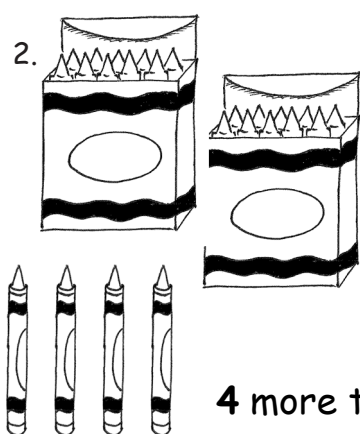
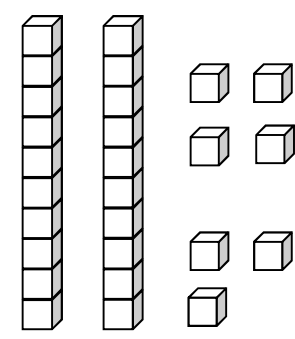
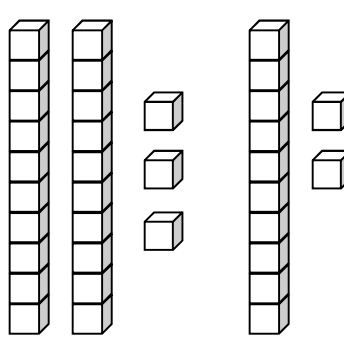
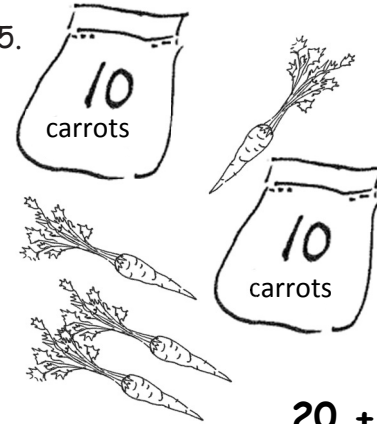
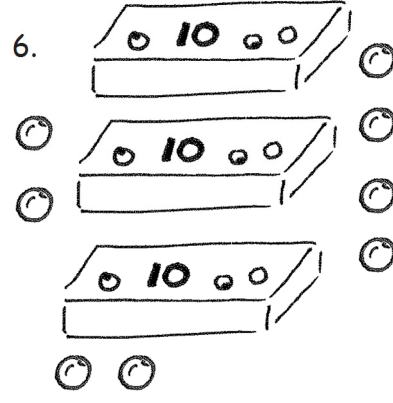
Write the tens and ones. Then, write an addition sentence to add the tens and ones.

<p>1.</p>  <table border="1" style="margin-left: auto; margin-right: auto; text-align: center;"> <thead> <tr> <th style="padding: 2px;">tens</th> <th style="padding: 2px;">ones</th> </tr> </thead> <tbody> <tr> <td style="height: 40px;"> </td> <td style="height: 40px;"> </td> </tr> </tbody> </table> <p style="text-align: center; margin-top: 20px;"><u>10</u> + <u> </u> = <u> </u></p>	tens	ones			<p>2.</p>  <table border="1" style="margin-left: auto; margin-right: auto; text-align: center;"> <thead> <tr> <th style="padding: 2px;">tens</th> <th style="padding: 2px;">ones</th> </tr> </thead> <tbody> <tr> <td style="height: 40px;"> </td> <td style="height: 40px;"> </td> </tr> </tbody> </table> <p style="text-align: center; margin-top: 20px;"><u> </u> + <u>4</u> = <u> </u></p>	tens	ones		
tens	ones								
tens	ones								
<p>3.</p>  <table border="1" style="margin-left: auto; margin-right: auto; text-align: center;"> <thead> <tr> <th style="padding: 2px;">tens</th> <th style="padding: 2px;">ones</th> </tr> </thead> <tbody> <tr> <td style="height: 40px;"> </td> <td style="height: 40px;"> </td> </tr> </tbody> </table> <p style="text-align: center; margin-top: 20px;"><u> </u> = <u>30</u> + <u> </u></p>	tens	ones			<p>4.</p>  <table border="1" style="margin-left: auto; margin-right: auto; text-align: center;"> <thead> <tr> <th style="padding: 2px;">tens</th> <th style="padding: 2px;">ones</th> </tr> </thead> <tbody> <tr> <td style="height: 40px;"> </td> <td style="height: 40px;"> </td> </tr> </tbody> </table> <p style="text-align: center; margin-top: 20px;"><u> </u> = <u>6</u> + <u> </u></p>	tens	ones		
tens	ones								
tens	ones								

Name _____


Date _____

Fill in the number bond, or write the tens and ones. Complete the addition sentences.

<p>1. </p> <div style="display: flex; align-items: center; justify-content: center;"> <table border="1" style="border-collapse: collapse; margin-right: 20px;"> <tr><td style="width: 40px; height: 40px;"></td><td style="width: 40px; height: 40px;"></td></tr> <tr><td style="width: 40px; height: 40px;"></td><td style="width: 40px; height: 40px;"></td></tr> </table> <div style="text-align: center;"> <table border="1" style="border-collapse: collapse;"> <tr><td style="width: 40px; height: 40px;"></td><td style="width: 40px; height: 40px;"></td></tr> </table> </div> </div> <p style="text-align: center;">$3 + 20 = \underline{\quad}$</p> <p style="text-align: center;">20 more than 3 is $\underline{\quad}$.</p>							<p>2. </p> <div style="display: flex; align-items: center; justify-content: center;"> <table border="1" style="border-collapse: collapse; margin-right: 20px;"> <tr><td style="width: 40px; height: 40px;"></td><td style="width: 40px; height: 40px;"></td></tr> <tr><td style="width: 40px; height: 40px;"></td><td style="width: 40px; height: 40px;"></td></tr> </table> <div style="text-align: center;"> <table border="1" style="border-collapse: collapse;"> <tr><td style="width: 40px; height: 40px;"></td><td style="width: 40px; height: 40px;"></td></tr> </table> </div> </div> <p style="text-align: center;">$20 + 4 = \underline{\quad}$</p> <p style="text-align: center;">4 more than 20 is $\underline{\quad}$.</p>						
<p>3. </p> <div style="display: flex; align-items: center; justify-content: center; margin-top: 20px;"> <table border="1" style="border-collapse: collapse; margin-right: 20px;"> <thead> <tr><th style="padding: 5px;">tens</th><th style="padding: 5px;">ones</th></tr> </thead> <tbody> <tr><td style="width: 40px; height: 40px;"></td><td style="width: 40px; height: 40px;"></td></tr> </tbody> </table> </div> <p style="text-align: center;">$7 + 20 = \underline{\quad}$</p>	tens	ones			<p>4. </p> <div style="display: flex; align-items: center; justify-content: center; margin-top: 20px;"> <table border="1" style="border-collapse: collapse; margin-right: 20px;"> <thead> <tr><th style="padding: 5px;">tens</th><th style="padding: 5px;">ones</th></tr> </thead> <tbody> <tr><td style="width: 40px; height: 40px;"></td><td style="width: 40px; height: 40px;"></td></tr> </tbody> </table> </div> <p style="text-align: center;">$\underline{\quad} + 30 = \underline{\quad}$</p>	tens	ones						
tens	ones												
tens	ones												
<p>5. </p> <div style="display: flex; align-items: center; justify-content: center; margin-top: 20px;"> <table border="1" style="border-collapse: collapse; margin-right: 20px;"> <thead> <tr><th style="padding: 5px;">tens</th><th style="padding: 5px;">ones</th></tr> </thead> <tbody> <tr><td style="width: 40px; height: 40px;"></td><td style="width: 40px; height: 40px;"></td></tr> </tbody> </table> </div> <p style="text-align: center;">$20 + \underline{\quad} = \underline{\quad}$</p>	tens	ones			<p>6. </p> <div style="display: flex; align-items: center; justify-content: center; margin-top: 20px;"> <table border="1" style="border-collapse: collapse; margin-right: 20px;"> <thead> <tr><th style="padding: 5px;">tens</th><th style="padding: 5px;">ones</th></tr> </thead> <tbody> <tr><td style="width: 40px; height: 40px;"></td><td style="width: 40px; height: 40px;"></td></tr> </tbody> </table> </div> <p style="text-align: center;">$\underline{\quad} + \underline{\quad} = \underline{\quad}$</p>	tens	ones						
tens	ones												
tens	ones												

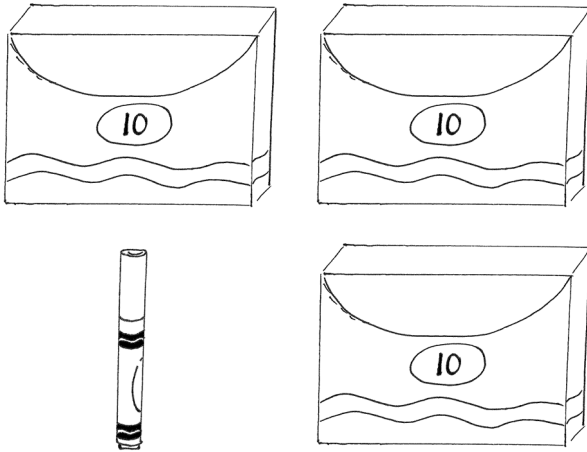
Match the pictures with the words.

7.




• • 1 and 30 make _____.

8.



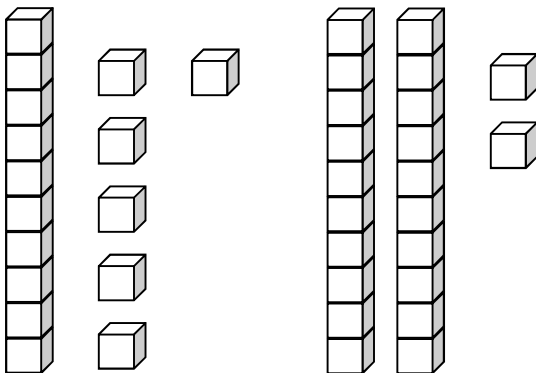
• • $8 + 30 =$ _____.

9.



• • 2 more than 10 is _____.

10.



• • $20 + 4 =$ _____.