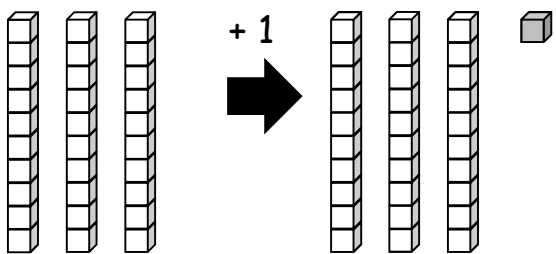
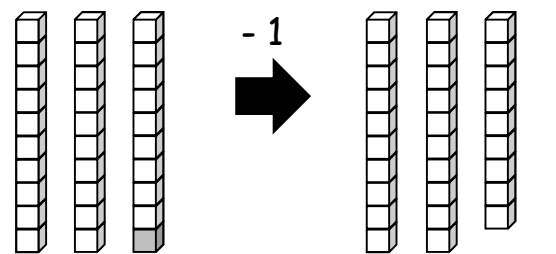
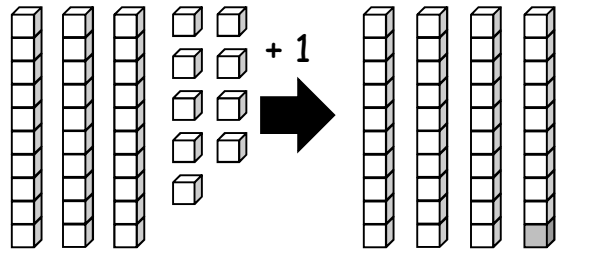
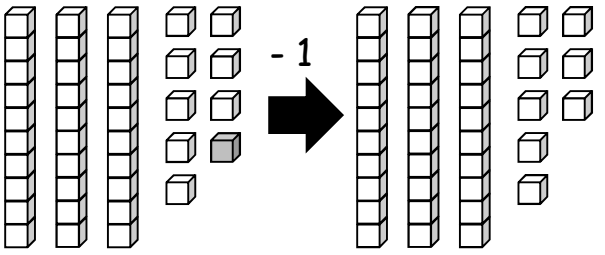
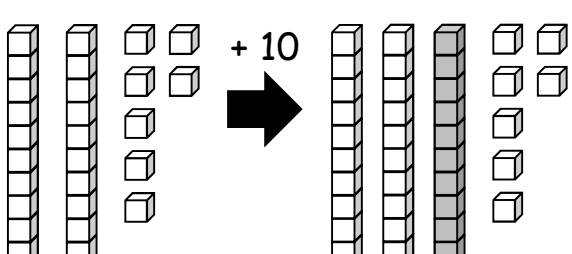
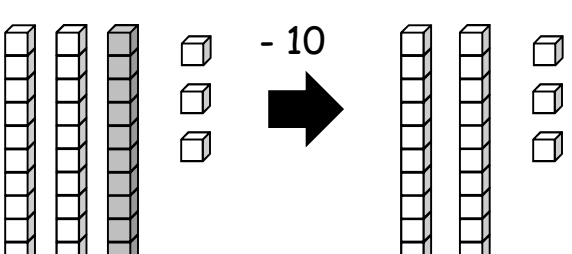


Lesson 5 Objective: Identify 10 more, 10 less, 1 more, and 1 less than a two-digit number.

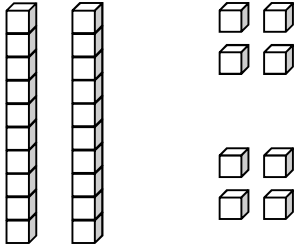
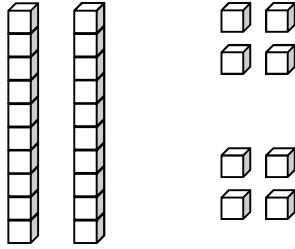
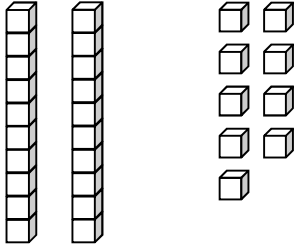
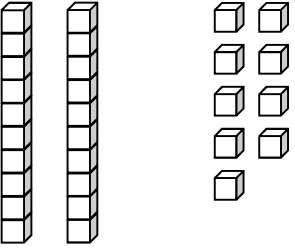
Name _____

Date _____

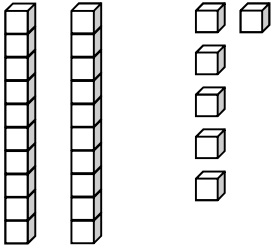
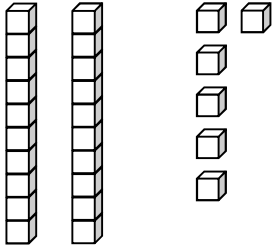
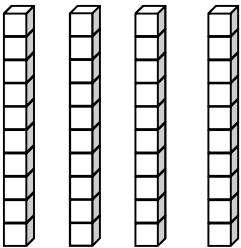
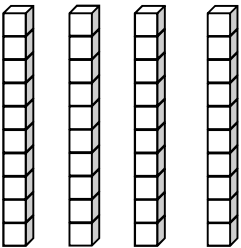
Write the number.

<p>1.</p>  <p>1 more than 30 is _____.</p>	<p>2.</p>  <p>1 less than 30 is _____.</p>
<p>3.</p>  <p>1 more than 39 is _____.</p>	<p>4.</p>  <p>1 less than 39 is _____.</p>
<p>5.</p>  <p>10 more than 27 is _____.</p>	<p>6.</p>  <p>10 less than 33 is _____.</p>

Draw 1 more or 10 more. You may use a quick ten to show 10 more.

<p>7.</p>  <p>1 more than 28 is _____.</p>	<p>8.</p>  <p>10 more than 28 is _____.</p>
<p>9.</p>  <p>1 more than 29 is _____.</p>	<p>10.</p>  <p>10 more than 29 is _____.</p>

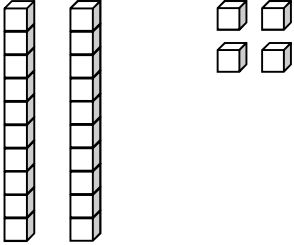
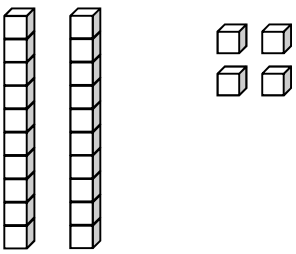
Cross off (x) to show 1 less or 10 less.

<p>11.</p>  <p>10 less than 26 is _____.</p>	<p>12.</p>  <p>1 less than 26 is _____.</p>
<p>13.</p>  <p>10 less than 40 is _____.</p>	<p>14.</p>  <p>1 less than 40 is _____.</p>

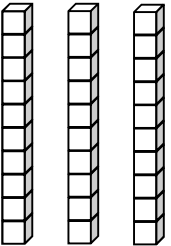
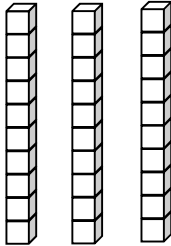
Name _____

Date _____

Draw 1 more or 10 more. You may use a quick ten to show 10 more.

<p>1.</p>  <p style="text-align: center;">1 more than 24 is _____.</p>	<p>2.</p>  <p style="text-align: center;">10 more than 24 is _____.</p>
---	---

Cross off (x) to show 1 less or 10 less.

<p>3.</p>  <p style="text-align: center;">10 less than 30 is _____.</p>	<p>4.</p>  <p style="text-align: center;">1 less than 30 is _____.</p>
---	---

Name _____

Date _____

Draw quick tens and ones to show the number. Then, draw 1 more or 10 more.

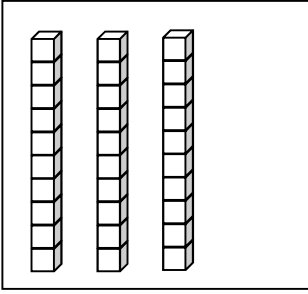
<p>1.</p> <p>1 more than 38 is _____.</p>	<p>2.</p> <p>10 more than 38 is _____.</p>
<p>3.</p> <p>1 more than 35 is _____.</p>	<p>4.</p> <p>10 more than 35 is _____.</p>

Draw quick tens and ones to show the number. Cross off (x) to show 1 less or 10 less.

<p>5.</p> <p>10 less than 23 is _____.</p>	<p>6.</p> <p>1 less than 23 is _____.</p>
<p>7.</p> <p>10 less than 31 is _____.</p>	<p>8.</p> <p>1 less than 31 is _____.</p>

Match the words to the picture that shows the right amount.

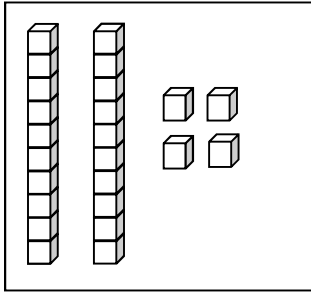
9.



●

● 1 less than 30.

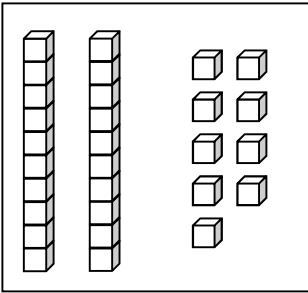
10.



●

● 1 more than 23.

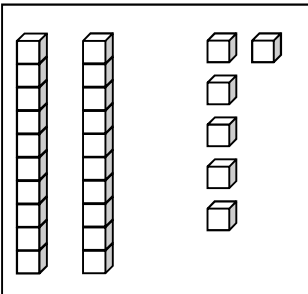
11.



●

● 10 less than 36.

12.



●

● 10 more than 20.