
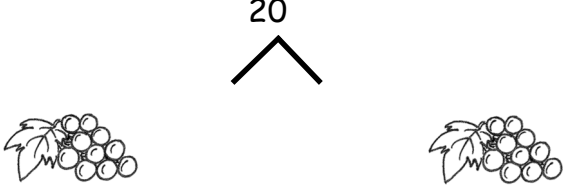
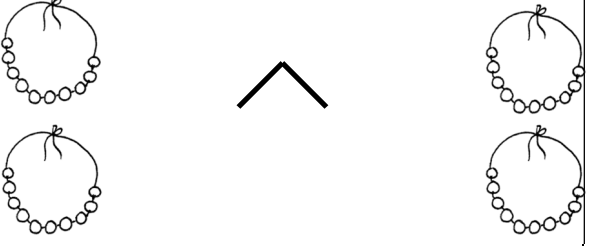



Lesson 11 Objective: Add and subtract tens from a multiple of 10.

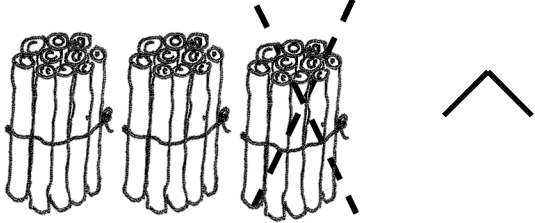
Name _____

Date _____

Complete the number bonds and number sentences to match the picture. The first one is done for you.


<p>1.</p>  <p style="text-align: center;">3 tens + 1 ten = 4 tens 30 + 10 = 40</p>	<p>2.</p>  <p style="text-align: center;">_____ ten + _____ ten = _____ tens</p> <p style="text-align: center;">_____</p>
<p>3.</p>  <p style="text-align: center;">_____ tens = _____ tens + _____ tens</p> <p style="text-align: center;">_____</p>	<p>4.</p>  <p style="text-align: center;">_____ tens = _____ tens + _____ ten</p> <p style="text-align: center;">_____</p>

5.




_____ tens - _____ ten = _____ tens

6.



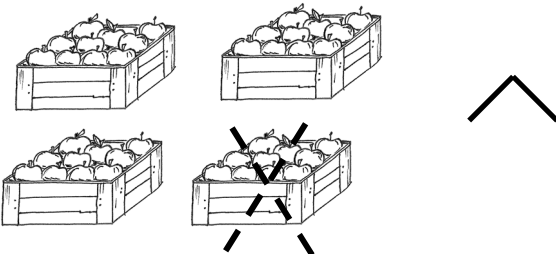
_____ tens - _____ tens = _____ tens

7.



_____ tens + _____ ten = _____ tens


8.



_____ tens - _____ ten = _____ tens

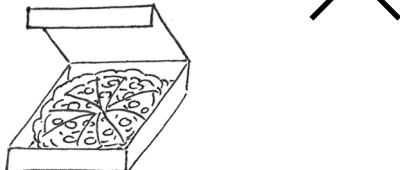
_____ + _____

9.



_____ tens - _____ tens = _____ ten

10.



_____ ten - _____ tens = _____ ten

11. Fill in the missing numbers. Match the related addition and subtraction facts.

a. 4 tens - 2 tens = _____ 2 tens + 1 ten = 3 tens

b. $40 - 30 =$ _____ $30 + 10 = 40$

c. $30 - 20 =$ _____ $20 + 20 = 40$

12. Fill in the missing numbers.

a. $20 + 20 =$ _____

b. $30 - 20 =$ _____

c. $10 +$ _____ $= 40$

d. $20 -$ _____ $= 0$

e. $40 -$ _____ $= 10$

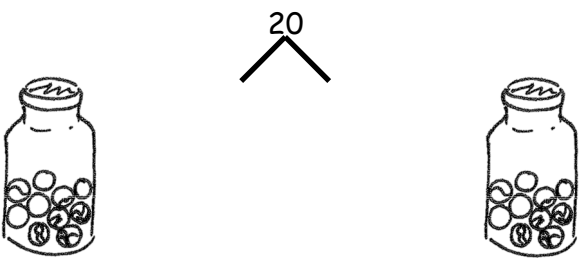
f. _____ $+$ _____ $= 30$

Name _____

Date _____

Complete the number bonds and number sentences.

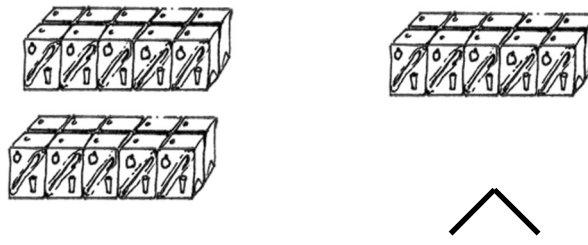
1.



1 ten + 1 ten = _____ tens

_____ + _____ = 20


2.



_____ tens = _____ tens + _____ ten

_____ = _____ + _____


3.



_____ tens - _____ ten = _____ tens

_____ - _____ = _____

4.



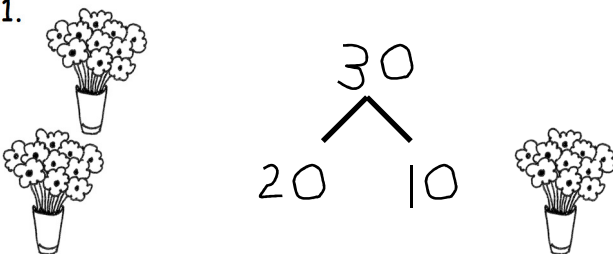
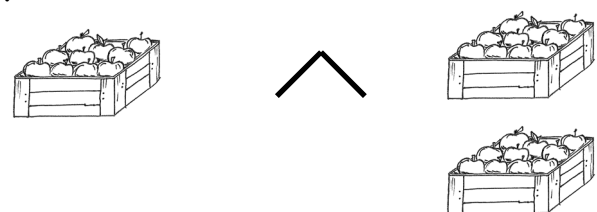
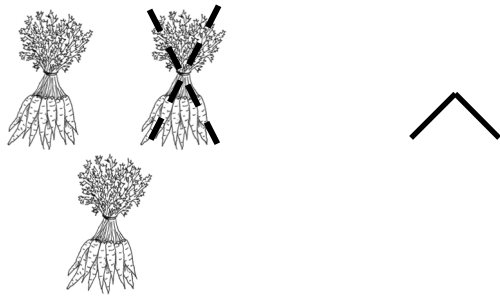
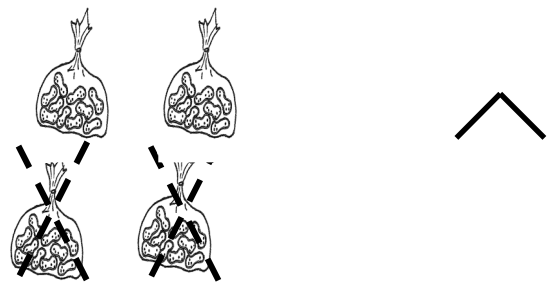
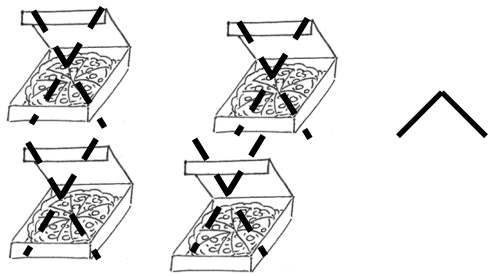
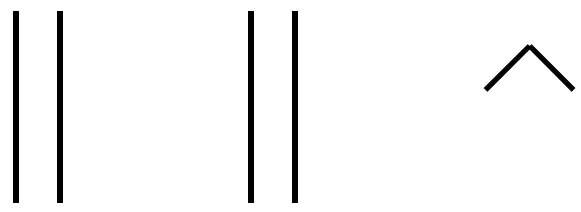
_____ tens - _____ tens = _____ tens

_____ - _____ = _____





Name _____

Date _____

Draw a number bond, and complete the number sentences to match the pictures.

<p>1.</p>  <p>2 tens + 1 ten = 3 tens $20 + 10 = 30$</p>	<p>2.</p>  <p>_____ tens = _____ ten + _____ tens</p> <p>_____</p>
<p>3.</p>  <p>_____ tens - _____ ten = _____ tens</p> <p>_____</p>	<p>4.</p>  <p>_____ tens - _____ tens = _____ tens</p> <p>_____</p>
<p>5.</p>  <p>_____ tens - _____ tens = _____ tens</p> <p>_____</p>	<p>6.</p>  <p>_____ tens + _____ tens = _____ tens</p> <p>_____</p>

Draw quick tens and a number bond to help you solve the number sentences.

7.  $10 + 20 = \underline{\quad}$	8.  $30 - 10 = \underline{\quad}$
9.  $20 - 10 = \underline{\quad}$	10.  $30 + 10 = \underline{\quad}$

Add or subtract.

11. 2 tens + 1 ten = $\underline{\quad}$

12. $20 + 20 = \underline{\quad}$

13. $40 - 10 = \underline{\quad}$

14. $\underline{\quad} = 20 + 10$

15. 3 tens - 2 tens = $\underline{\quad}$

16. $20 - 10 = \underline{\quad}$

17. $10 - 10 = \underline{\quad}$

18. $\underline{\quad} = 30 + 10$

19. $40 - 30 = \underline{\quad}$