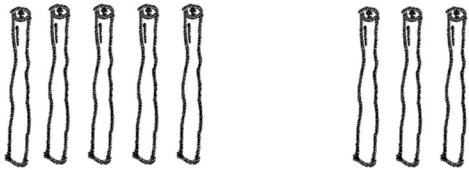
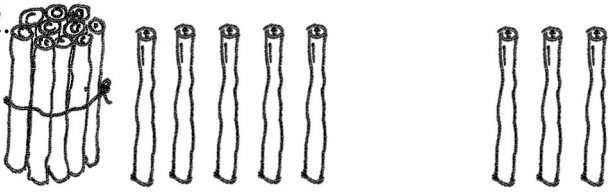
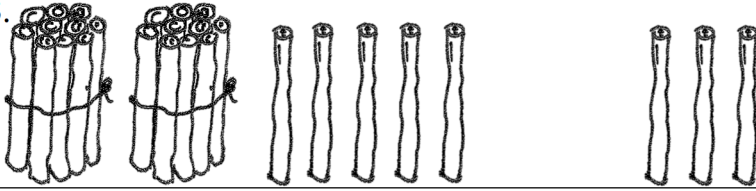
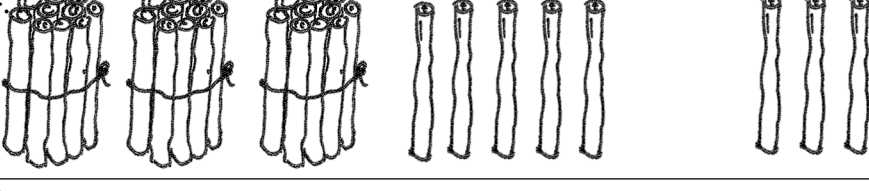





Lesson 15

Name _____

Date _____




Solve the problems.

<p>1. </p>	$5 + 3 = \underline{\quad}$
<p>2. </p>	$15 + 3 = \underline{\quad}$
<p>3. </p>	$25 + 3 = \underline{\quad}$
<p>4. </p>	$35 + 3 = \underline{\quad}$
<p>5. </p>	$8 + 4 = \underline{\quad}$
<p>6. </p>	$18 + 4 = \underline{\quad}$
<p>7. </p>	$28 + 4 = \underline{\quad}$

Name _____

Date _____

1. Solve the problems.

a.		$7 + 5 = \underline{\quad}$
b.		$17 + 5 = \underline{\quad}$
c.		$27 + 5 = \underline{\quad}$

Solve the problems.

2. a. $5 + 3 = \underline{\quad}$

3. a. $5 + 8 = \underline{\quad}$

b. $15 + 3 = \underline{\quad}$

b. $15 + 8 = \underline{\quad}$

c. $25 + 3 = \underline{\quad}$


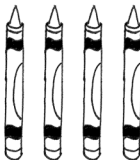
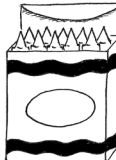


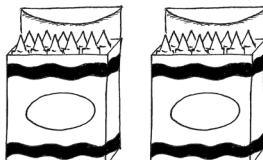


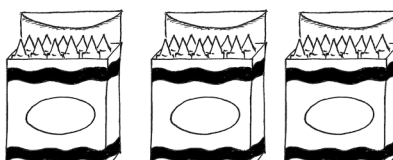









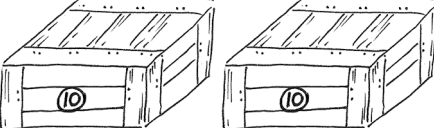



c. $25 + 8 = \underline{\quad}$

d. $35 + 3 = \underline{\quad}$

Name _____

Date _____

Solve the problems.

<p>1.  </p>	<p>$5 + 4 = \underline{\quad}$</p>
<p>2.   </p>	<p>$15 + 4 = \underline{\quad}$</p>
<p>3.   </p>	<p>$25 + 4 = \underline{\quad}$</p>
<p>4.   </p>	<p>$35 + 4 = \underline{\quad}$</p>
<p>5.   </p>	<p>$8 + 4 = \underline{\quad}$</p>
<p>6.    </p>	<p>$18 + 4 = \underline{\quad}$</p>
<p>7.    </p>	<p>$28 + 4 = \underline{\quad}$</p>

Use the first number sentence in each set to help you solve the other problems.

