

Name \_\_\_\_\_

Date \_\_\_\_\_

1. Match the clocks that show the same time.

a.



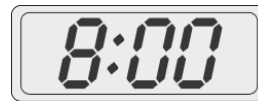
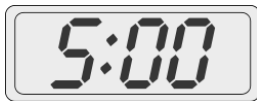
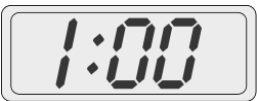

b.




c.



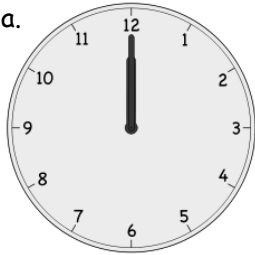

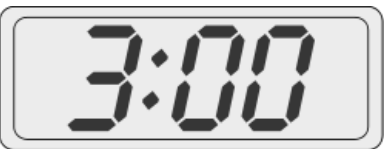
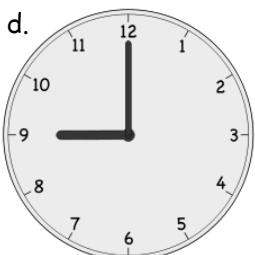

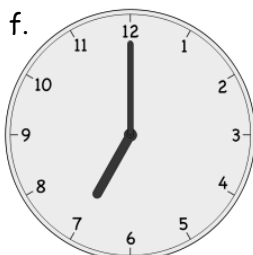
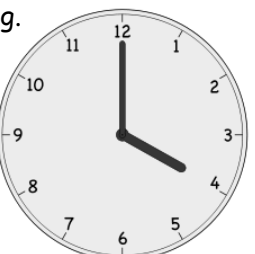
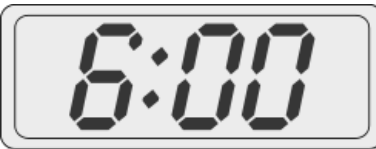

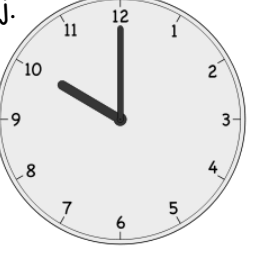


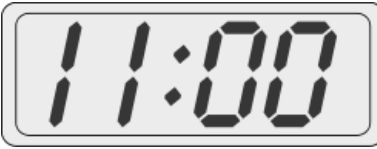

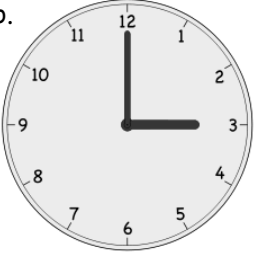
d.



2. Put the hour hand on this clock so that the clock reads 3 o'clock.







3. Write the time shown on each clock.

<p>a.</p>  <p>_____ : _____</p>	<p>b.</p>  <p>_____ o'clock</p>	<p>c.</p>  <p>_____ o'clock</p>
<p>d.</p>  <p>_____ o'clock</p>	<p>e.</p>  <p>_____ : _____</p>	<p>f.</p>  <p>_____ o'clock</p>
<p>g.</p>  <p>_____ : _____</p>	<p>h.</p>  <p>_____ o'clock</p>	<p>i.</p>  <p>_____ : _____</p>
<p>j.</p>  <p>_____ o'clock</p>	<p>k.</p>  <p>_____ : _____</p>	<p>l.</p>  <p>_____ o'clock</p>
<p>m.</p>  <p>_____</p>	<p>n.</p>  <p>_____</p>	<p>o.</p>  <p>_____</p>

Name \_\_\_\_\_

Date \_\_\_\_\_

Write the time shown on each clock.

<p>1.</p>  <p>_____</p>	<p>2.</p>  <p>_____</p>
<p>3.</p>  <p>_____</p>	<p>4.</p>  <p>_____</p>