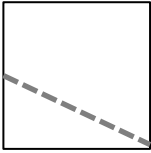

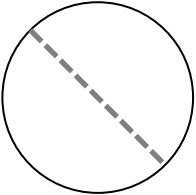


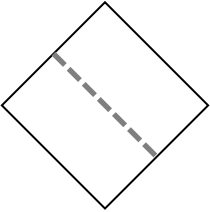


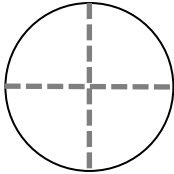
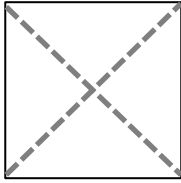
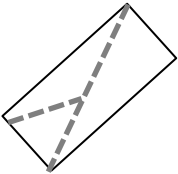

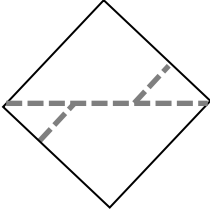
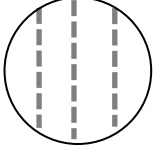
Name \_\_\_\_\_

Date \_\_\_\_\_

1. Are the shapes divided into halves? Write yes or no.

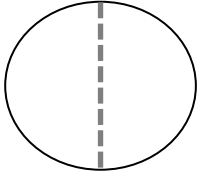
<p>a.</p>  <p>_____</p>	<p>b.</p>  <p>_____</p>	<p>c.</p>  <p>_____</p>
<p>d.</p>  <p>_____</p>	<p>e.</p>  <p>_____</p>	<p>f.</p>  <p>_____</p>

2. Are the shapes divided into quarters? Write yes or no.

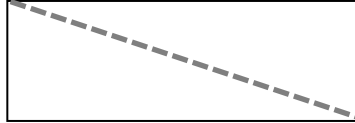
<p>a.</p>  <p>_____</p>	<p>b.</p>  <p>_____</p>	<p>c.</p>  <p>_____</p>
<p>d.</p>  <p>_____</p>	<p>e.</p>  <p>_____</p>	<p>f.</p>  <p>_____</p>

3. Color half of each shape.

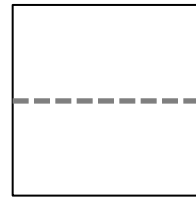
a.



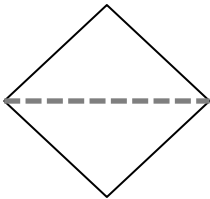
b.



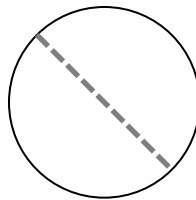
c.




d.



e.

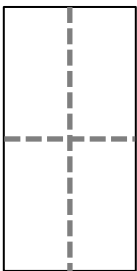


f.

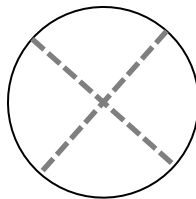


4. Color 1 fourth of each shape.

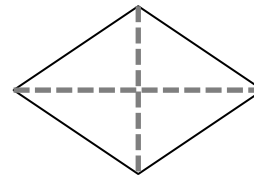
a.



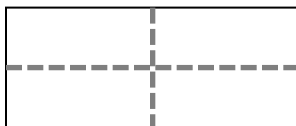
b.



c.



d.



e.

